


“ANGLES ARE AWESOME!”

In the space provided, write the correct amount of angles for each shape.
Then circle the name of the shape below it.




_____ angles




rectangle or star

_____ angles



circle or isosceles triangle



_____ angles

equilateral triangle or octagon



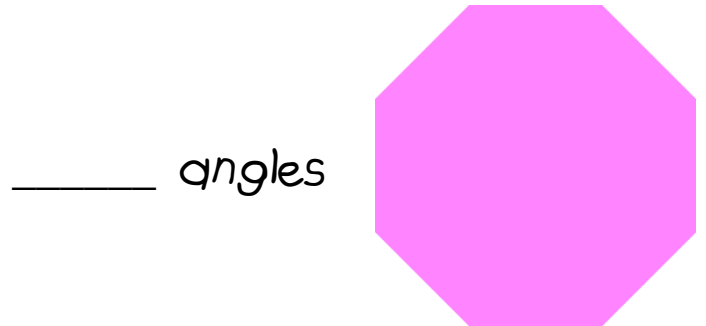
_____ angles

hexagon or square




_____ angles

parallelogram or trapezoid




_____ angles

oval or octagon



_____ angles

hexagon or cube



_____ angles

pyramid or pentagon