

"ANGLES ARE AWESOME!"

In the space provided, write the correct amount of angles for each shape.
Then circle the name of the shape below it.

Answers for 2nd Grade - Lesson #3




4 angles




rectangle or star

3 angles



circle or isosceles triangle



3 angles


equilateral triangle or octagon



4 angles


hexagon or square

4 angles




parallelogram or trapezoid

8 angles




oval or octagon



6 angles

hexagon or cube



5 angles

pyramid or pentagon